


SUMMER HOLIDAYS HOMEWORK



CLASS: Fourth
NAME: _____



English

- Read Unit -1 to 3 and learn difficult words, word –meaning, exercises and Question/Answer of Unit-1, 2 and lesson-1 of Unit-3.
- English Grammar: Revise lessons 3 to 5.
Learn an application to your Principal for two days leave due to Uncle's marriage.
- Written Work: Write 20 difficult words of unit 1 and 2 other than notebook and write 5 pages of good handwriting in fair notebook.

Hindi

- हिन्दी पाठ्य पुस्तक रिमिनिम : पाठ-1, 2 व 5 पढ़िए व अभ्यास सहित याद कीजिए।
- व्याकरण वसुधा : पाठ-1 व 2 पढ़िए व अभ्यास याद कीजिए।
अनुच्छेद : 'वर्षा का एक दिन' याद कीजिए।
दस (10) पृष्ठ सुलेख लिखिए।

Mathematics

- Learn and write tables 2 to 20.
- Revise Chapters 1 to 3.

Science

- Read lessons 1 to 4 and learn exercises and Que./Ans. of Lessons 1,2 and 3.

Social Science

- Read Lessons – 1, 2,9,13 and 16 carefully. Learn Q/Ans and exercises of Lessons 1, 2 and 9.
- Read 'Did you know?' also which are highlighted in all the above mentioned lessons. These are given in boxes in the course book.
- Read any Hindi/English newspaper daily to become aware about social, political, cultural environment nearby you.

G.K.

- Learn Lessons 6 to 12.

Computer

- Read Lessons 1 and lesson 2.
- Learn exercise of lesson-1

Drawing

- Fill colour in Art-1 to 8 in your drawing book.
- Draw and colour the following articles in your drawing notebook:-
 1. Dolphins
 2. Butterfly

ASSIGNMENTS

English

1. Write 'True' or 'False' for the following sentences :-
 - (a) The nose looks flat in the mirror.
 - (b) The magician granted four wishes of the 'Little fir Tree'.
 - (c) Neha's clock rang at 4 o'clock every morning.
2. Write the opposite of the following words by adding 'un' 'or' 'im'
 - (a) Satisfy _____
 - (b) Proper _____
 - (c) Expected _____
3. Identify the different types of sentences as interrogative, imperative, exclamatory or statements.
 - (a) Why were you absent yesterday?
 - (b) How exciting the match was!
 - (c) Go out of the class.
4. Rewrite the following as interrogative sentences.
 - (a) The girl is reading.
 - (b) The train will be late.
 - (c) You have a pencil.
5. Change the given sentences into negative sentences.
 - (a) She has money.
 - (b) Mohini was at home.
 - (c) Eat slowly.

Hindi

1. निम्नलिखित प्रश्नों के उत्तर एक शब्द में लिखिए –
 - (i) ख्वाजा सरा ने बीरबल को क्या साबित करने के लिए कुछ मुश्किल प्रश्न सोच लिए?
 - (ii) कुछ बादल हाथी के समान क्या उठाए लगते हैं?
 - (iii) नसीरुद्दीन कैसी अचकन निकालकर लाए?
 - (iv) गपशप करने के बाद दोनों दोस्त कहाँ घूमकर आए?
 - (v) अकबर ने बीरबल से दूसरा प्रश्न क्या किया?
2. उचित मिलान करें।
 - (i) अभिमान – ताकवर
 - (ii) शक्तिशाली – घमंड
 - (iii) आकार – पहचान
 - (iv) परिचय – बनावट
 - (v) आयु – उम्र

3. कोष्ठक में से उचित शब्द छाँटकर रिक्त स्थानों की पूर्ति कीजिए :

- (i) हमारी राष्ट्रीय भाषा है। (अंग्रेजी/हिन्दी)
- (ii) उर्दू भाषा की लिपि है। (फारसी/रोमन)
- (iii) अयोगवाह होते हैं। (दो/तीन)
- (iv) स्वरों की संख्या होती है। (दो/ग्यारह)
- (v) क्ष, त्र व्यंजन कहलाते हैं। (अतिरिक्त/संयुक्त)

4. निम्नलिखित वाक्यों के आगे भाषा का सही रूप लिखिए -

- (i) रेडियो पर गीत सुनना-
- (ii) कहानी लिखना-
- (iii) अखबार पढ़ना -
- (iv) डायरी लिखना-
- (v) मोबाइल पर बात करना-

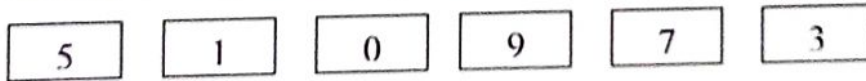
5. निम्नलिखित भाषाओं की लिपि का नाम लिखिए -

- (i) गुजराती -
- (ii) जर्मन -
- (iii) मराठी -
- (iv) अरबी -
- (v) नेपाली -

नोट :- हिन्दी का गृहकार्य अलग कॉपी में कीजिए।

Mathematics

1. Write 982442 in words _____
2. Write in short form :- $700000 + 50000 + 4000 + 10 + 7$
3. Write all possible 3-digit numbers using each of the digit 3,6,4 (only ones) and then arrange them in ascending order :-
4. Find the product of smallest 3-digit number and the greatest 2-digit number
_____.
5. Arrange the digit in the square as directed



- (i) The largest 6-digit number :- _____
- (ii) The smallest 6-digit number :- _____

6. Tick (\checkmark) the correct answer : -

(i) A leap year has _____ days.

(a) 365

(b) 366

(c) 360

(ii) 1 hour = _____ minutes

(a) 60

(b) 30

(c) 45

(iii) 1 minute = _____ seconds.

(a) 90

(b) 60

(c) 75

7. Choose the correct unit of time :-

[hours/minutes/seconds]

(a) Watching a movie _____

(b) Brush your teeth _____

(c) Blink your eyes _____

8. Which number is greater – 56440 or 564404

9. Choose 2 numbers from the box whose product is 108 and write in the empty.

boxes \times = 180

12	6	8
14	7	18

10. Look at each number. Tick the nearest 10 from the boxes.

(i) 87 90/80

(ii) 375 370/380

(iii) 1687 1690/1680

Solve without calculation questions 11 to 14:-

11. $7524 \times 20 =$ _____

12. $53240 - 100 =$ _____

13. $8274 \div 1 =$ _____

14. $92364 + 200 =$ _____

15. A train starts from Delhi at 5:00 a.m. and reaches Lucknow after 8 hours. At what time did it reach Lucknow?

16. Write time with a.m. or p.m.

(a) 9:30 at night _____

(b) 2:10 in the afternoon _____

(c) Sunrise at 5:30 _____

17. Ram goes to play at 5:30 p.m. and reaches home at 7:00 pm. How long does he play?

18. In the auto-fair in Bengaluru, some new cars were showcased. Their prices are mentioned below.

1. Compare the prices of the cars :-

(a) Car A Car C

(b) Car D Car B

(c) Car C Car B

(d) Car D Car A



A
₹ 13,05,382



B
₹ 2,03,45,500



C
₹ 89,32,000



D
₹ 4,45,89,414

2. Which car is the most expensive _____

3. Which car is the least expensive _____

4. Arrange the prices of the car in descending order :-

19. Find the missing digits :

$$\begin{array}{r} 6 \quad 7 \quad 4 \quad 6 \quad 0 \\ \square \quad 9 \quad \square \quad 2 \quad \square \\ 8 \quad \square \quad 9 \quad \square \quad 8 \end{array}$$

(ii) $5 \quad 9 \quad 3 \quad 5 \quad 0$

$$\begin{array}{r} + \quad 9 \quad \square \quad 1 \quad \square \\ 6 \quad \square \quad 9 \quad \square \quad 9 \end{array}$$

20. True/ False

(i) A brick has 5 faces.

(ii) There are five zeroes in one lakh.

(iii) One more than 999 is 10000.

(iv) $39 \times 4 \times 0 = 0$

Science

1. Answer in one word:-

- (i) An insectivorous plant _____
- (ii) A tree that has breathing roots _____
- (iii) The process of shedding of old skin _____
- (iv) Organ through which insects sense changes. _____



2. Unscramble the following letters to make meaningful words

- I. SATCRH _____
- II. OLUTS _____
- III. RPITELE _____
- IV. AUBLEMN _____



3. Circle the odd one out :-

- (i) Kiwi Ostrich Parrot Penguin
- (ii) Mango Peepal Neem Duckweed
- (iii) Tip Lamina Root Midrib
- (iv) Deer Housefly Cow Elephant

4. Write True or False :

- (i) Reptiles lay their eggs on land.
- (ii) The larva of a butterfly is called caterpillar.
- (iii) Plants need only water to make their food.
- (iv) Tapegrass has flat and broad leaves.




5. Group the following we eat according to the edible plant parts.

carrot turnip radish ginger lettuce sugar cane patato
 cabbage broccoli rice orange wheat cauliflower apple

Roots	Stems	Leaves	Flowers	Fruits	Seeds



6. Label each stage in the life of a butterfly.



7.



HIGHER ORDER THINKING SKILLS

Fill in the blanks of the passage given below and find those words in the word maze.

Plants do not*eat*..... food like animals. They make their own The food is made in leaves of the plant. Leaves use carbon dioxide, and from the sun to make food. The absorb water from the Air enters the through tiny called The excess amount of food is stored in different parts of the plant. In sugar cane plant, it is stored in the

e	a	t	s	o	i	l
p	i	f	t	a	l	i
o	r	o	o	t	s	g
r	l	o	m	a	a	h
e	e	d	a	r	f	t
s	a	s	t	e	m	s
a	f	w	a	t	e	r

So. St.

1. Match the following :-

Column A	Column B
(i) National fruit of India	(a) Akbar
(ii) Satyamev Jayate	(b) Pedology
(iii) Fatehpur Sikri	(c) Agartala
(iv) Prevention of soil	(d) Goa
(v) Neighbouring country	(e) Mango
(vi) Smallest state of India	(f) Imphal
(vii) Moti Masjid	(g) Shah Jahan
(viii) Study of soil	(h) Pakistan
(ix) Tripura	(i) Soil conservation
(x) Manipur	(j) Truth alone triumphs

2. Write True/False for the following statements :-

- (i) Kanyakumari marks the northernmost tip of the mainland India.
- (ii) Russia is larger than India in terms of area.
- (iii) The lower Himalayas are also called the Middle Himalayas.
- (iv) Kohima is the capital of Meghalaya.
- (v) Soil is an important natural resource.
- (vi) Lagoons and backwaters are also source of underground water.
- (vii) Akbar was a patron of art and architecture.
- (viii) The peacock throne was made of solid gold.
- (ix) Our national anthem is Vande Matram.
- (x) India became independent on 26th January, 1950.

3. Answer in one/two words:-

- (a) Least populated state of India.
- (b) Most fertile soil found in India.
- (c) A Historical monument built on the banks of river Yamuna.
- (d) Our national anthem was adopted in this year.
- (e) Founder of the Mughal Empire in India.
- (f) Biggest mountain ranges in the world.

- (g) Groups of island in India. (How many)
- (h) Total number of spokes in the Dharma Chakra.
- (i) Name of the prince of architecture in Mughal empire.
- (j) A natural source of water.
- (k) First Indian woman to climb Mount Everest.
- (l) The name of government which governs the whole country.

G.K

Answer the following questions with the help of words given below:-

[Raja Ram Mohan Roy, 8th March, Mother Teresa, 18th April, 14th September, Cobra Lily, Dwarka, Godavari, Tulsi, Kanchenjunga]

1. When is International Hindi Diwas Celebrated?
Ans. _____
2. Which city is known as the Kingdom of Lord Krishna in the west?
Ans. _____
3. Which is the third highest mountain of the world?
Ans. _____
4. Which is the 'Queen of Herbs'?
Ans. _____
5. When is International women's Day celebrated?
Ans. _____
6. Which plant looks like a striking cobra and its forked leaves look like a serpent's fangs?
Ans. _____
7. Who quoted "If you can't feed a hundred people, then feed just one"?
Ans. _____
8. When is 'World Heritage Day' celebrated?
Ans. _____
9. Whose efforts led to the abolition of the 'Sati Pratha'?
Ans. _____
10. Which is the longest river of Peninsular India?
Ans. _____

ACTIVITIES

English : Prepare a chart on the topic 'sentences and its Kinds'. Paste or draw different kinds of pictures to make it more attractive.

Hindi : शरीर को स्वस्थ बनाए रखने के लिए कोई पाँच व्यायाम/योग के चित्र गृहकार्य की कॉपी में चिपकाकर उनके विषय में दो-दो वाक्य लिखिए।

Maths : Make a clock by using waste material.

Science : Make a model of 'an Egg' with the help of clay on a cardboard sheet and label its parts.

So.St. : Draw the outline map of India and colour it on A4 sheet.

G.K.:- Paste the pictures of any six freedom fighters on A-4 sheet with their original and nicknames. Write their slogans also.

Computer:- Collect pictures of the different Generation of computer and paste them in your scrap book and write their description also.

Special Tasks

- ❖ To know the names of the appliances used in the house.
- ❖ To learn to save water.
- ❖ Always switch off the electrical appliances while leave the room.
- ❖ To avoid T.V or mobile for one day in a week.
- ❖ To note down the number of household vehicles how much it drives daily etc.
- ❖ Take two books from the library and will also review them in 100 words.
- ❖ Write the names of Lok Sabha candidates. To identify the election symbols.