

VAISH MODEL SR. SEC. SCHOOL, BHIWANI

Summer Vacation Home Assignment

Session : 2025-26

Class : V

English

- Marigold : Read unit 1 to 3 and learn difficult words, word-meaning, exercises and question/Answer.
- English Grammar : Revise lessons 1 to 6.
Learn a letter to your younger/brother/sister to avoid bad company.
- Written Work : Write 30 difficult words of unit 1 to 3 other than notebook.

Assignment

1. Write 'True' or 'False' for the given sentences:
 - (i) People feel joyful on seeing the Ice-Cream Man.
 - (ii) Avial became a traditional Kerala dish.
 - (iii) Teamwork means combined effort of a group.
 - (iv) I think my shadow is the tallest at noon.
2. Write the following sentences as directed :
 - (i) The baby was sleeping. (negative)
 - (ii) The doctor was not out of station. (Affirmative)
 - (iii) My uncle is a gentle man. (Interrogative)
 - (iv) We were not late for the class. (Affirmative)
 - (v) Mr. Rohit teaches us Maths. (Negative)
3. Classify the given nouns as Common, Proper, Material, Collective and Abstract noun.

State, Player, staff, Bravery, steel, srinager, cluster, lux, clay, kingship

Common Noun	Proper Noun	Material Noun	Collective Noun	Abstract Noun

4. Write plural form for the given words :
Roof, Sheep, Mouse, Puppy, Goose, Story
5. Write feminine for the given words :
Monk, stag, Wizard, Drone, Nephew, God
6. Rearrange the given words to make sentences :
 - (i) need a new we make plan to
 - (ii) rings bell the peon school the
 - (iii) found quilty the jury the man

- (iv) he to with school goes friends his
(v) wind the my away pile of blew papers

Project Work

Prepare a project file on the topic 'sentence and its kinds'

Hindi

- हिंदी पाठ्य पुस्तक रिमझिम : पाठ 1 से 4 तक पढ़िए एवं अभ्यास सहित याद कीजिए।
- हिंदी आधुनिक व्याकरण : पाठ 1 व 2 पढ़िए तथा अभ्यास सहित याद कीजिए।
- लिखित कार्य : अनुच्छेद 'समय का सदुपयोग' तथा अवकाश हेतु प्रधानाचार्या जी को प्रार्थना-पत्र लिखिए। दस पृष्ठ सुलेख एवं तीस कठिन शब्द हिंदी की कॉपी में लिखिए।

हिंदी कार्यभार

1. रिक्त स्थानों की पूर्ति कीजिए।
 - (i) केशव के माता-पिता गुजरात से आकर बस गए।
 - (ii) सीमित क्षेत्र में बोली जाने वाली बोली कहलाती है।
 - (iii) 'खिलौनेवाला' नामक कविता द्वारा रचित है।
 - (iv) स्पर्श व्यंजनों की संख्या है।
2. निम्न कथनों के सामने सही (✓) या गलत (×) का निशान लगाइए।
 - (i) हिंदी में वर्णों की संख्या चालीस है।
 - (ii) भाषा के चार अंग होते हैं।
 - (iii) लोनपोगार रस्सी देखकर चकित रह गए।
 - (iv) झारखंड में सरहुल बड़े जोश-खरोश के साथ मनाया जाता है।
3. निम्नलिखित प्रश्नों के उत्तर एक शब्द या वाक्यांश में लिखिए।
 - (i) व्याकरण के कितने विभाग होते हैं?
 - (ii) मराठी भाषा की लिपि का नाम लिखिए।
 - (iii) मोहन ने खिलौनेवाले से क्या खरीदा?
 - (iv) केशव का जन्म कहाँ हुआ था?
4. नीचे लिखे व्यंजनों में से संयुक्त व द्वित्वव्यंजन छाँटकर अलग-अलग करके लिखिए।



5. निम्नलिखित चित्रों को देखकर अनुस्वार तथा अनुनासिक लगाकर नाम लिखिए।



6. नीचे दिए चित्रों के नाम को पढ़कर उनका वर्ण-विच्छेद करके लिखिए।



कमल



ओढ़नी



गवैया

प्रयोगात्मक कार्य : भिवानी शहर के किन्हीं पाँच दर्शनीय स्थलों का सचित्र वर्णन करके एक प्रोजेक्ट फाइल तैयार कीजिए।



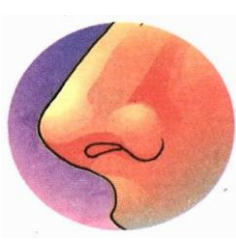

नोट : हिंदी का गृहकार्य एक अलग हिंदी की कॉपी में कीजिए।

Sanskrit

- **संकल्पम् प्रवेशिका :** पाठ-1 से 4 पढ़िए व अभ्यास सहित याद कीजिए।
- **व्याकरण :** नम् व पद् (धातु) लट् लकार याद कीजिए। 'बालक' शब्द रूप याद कीजिए।
- **लिखित कार्य :** पर्यायाः शब्दाः अपनी कक्षाकार्य कॉपी में लिखिए।
- किन्हीं पाँच फलों व पशुओं के नाम संस्कृत में लिखिए।

संस्कृत कार्यभार

1. निम्नलिखित शब्दों का वर्ण-विच्छेद कीजिए :-
(क) बालिका: (ख) मयूरौ (ग) त्रिशूलः (घ) सूचिका (ङ) वसुधा
2. निम्नलिखित चित्रों को देखकर उनके नाम संस्कृत में लिखिए :-



3. निम्नलिखित वर्णों का वर्ण संयोजन करके लिखिए :-

- (i) व्+अ+स्+उ+ध्+आ
- (ii) क्+उ+क्+क्+उ+र्+अः
- (iii) भ्+अ+ल्+ल्+उ+क्+औ
- (iv) क्+ऋ+प्+अ+ण्+अः

4. निम्नलिखित शब्द रूप के रिक्त स्थानों की पूर्ति कीजिए :-

विभक्ति	एकवचन	द्विवचन	बहुवचन
प्रथमा	बालकः	बालकाः
तृतीया	बालकाभ्याम्	बालकैः
षष्ठी	बालकस्य	बालकयोः
सप्तमी	बालके	बालकयोः

नोट: दिया गया लिखित कार्य संस्कृत की कक्षाकार्य कॉपी में कीजिए।

रचनात्मक कार्य : 1 से 10 गिनती संस्कृत में लिखिए व उन्हें चित्रों के माध्यम से दर्शाइए। (A4 साइज शीट पर)

Mathematics

1. Learn tables 2 to 20.

2. Revise :

Math-Magic : Ch 1 to Ch 4, Reasoning : Ch 1 to 3

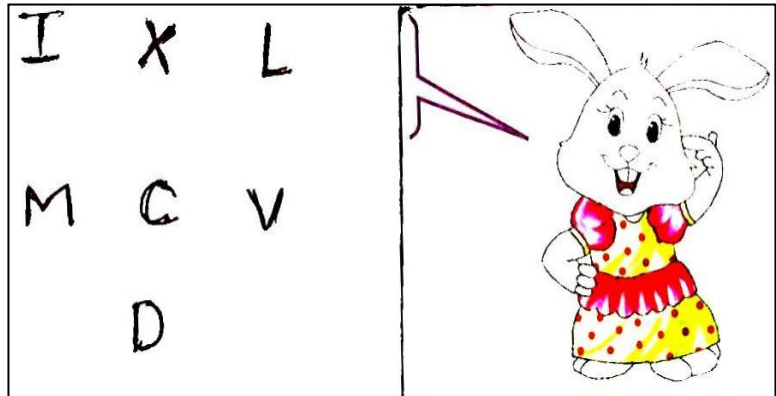
3. Activity : Do on A4 size sheet :

(i) Write tables 2 to 10 using Roman numerals.

Example :

Table of 2

II
IV
VI
VIII
X
XII
XIV
XVI
XVIII
XX



(ii) Draw angles of 60°, 90°, 120° and 30°.

(iii) Show equivalent fractions $\frac{1}{2}, \frac{2}{4}, \frac{3}{6}, \frac{4}{8}, \frac{5}{10}$ etc through shaded shapes.

(iv) Show water and mirror images of A, B, P, L, R, S, E

Assignment

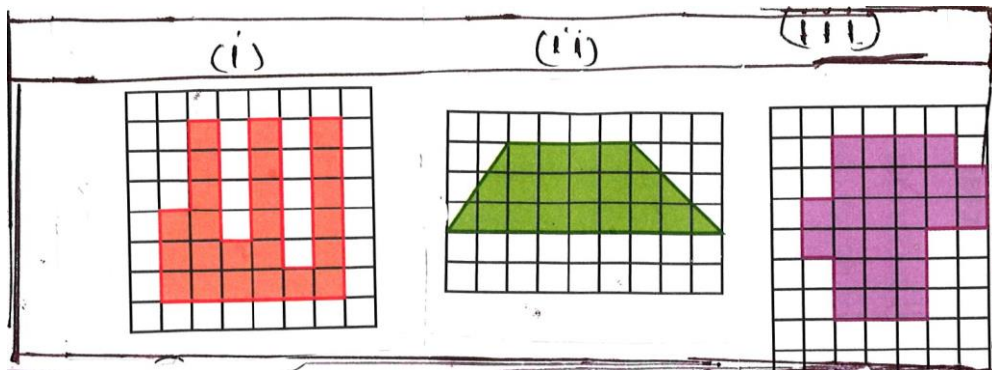
1. Fill the missing number in the box :

6	6	36
---	---	----

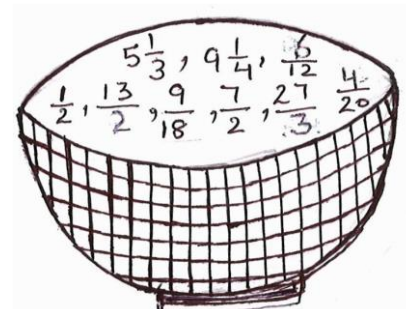
10	10	100
----	----	-----

25	25	
----	----	--

2. Complete the given pattern :
F6, I 9, L12, O15, R18
3. Arrange the following words in a logical order :
Dress Fibre cloth Thread Stitch, Tailor
4. Simplify : (a) $99 + 9 \div 9$ (b) $7 \div 7 + 7 \times 7$
5. How much is 80 thousands less than one lakh?
6. If CP=Rs. 3000, SP=Rs. 4000, then profit is _____.
7. If loss = Rs. 50 and CP=Rs. 500, then SP is _____.
8. I am equal to two right angles. Who am I? _____.
9. Rohan and Sohan stay 150 km apart. They decided to meet at a point. Rohan walked 90 km North. How much distance Sohan will cover and in which direction?
10. If speed = 60 km per hour, time =4 hours, then distance = _____.
11. If speed-4 km per hour, distance 120 km, then time = _____.
12. The sum of angles of a triangle is _____.
13. How many thousands are there in 9872? _____
14. How many numbers are there in between 20 and 30?
15. 1 crore = _____ millions
16. How many acute angles are there in alphabet N?
17. What is the area and perimeter of the given shapes if side of each small square is 1cm?



18. A basket is filled with various fractional numbers. On the basis of it answer the followings :
- (i) How many numbers are less than 1?
- (ii) Which fraction's lowest form is $\frac{1}{5}$?
- (iii) Which fraction is equal to $\frac{16}{3}$?
- (iv) Which fraction is equal to 9?
- (v) Which fraction represent $6\frac{1}{2}$?
- (vi) How many quarters are there in $9\frac{1}{4}$?



(vii) Which fractions are equivalent fractions of $\frac{1}{2}$?

Project : Prepare a working model on the different types of angles.

Science

- Revise Lessons 1 and 2.
- Learn Exercise, Que/Ans and Worksheet of Lessons-3 and 4
- Read Lesson 5.

‘Assignment’

1. Fill in the blanks with the words from the box given below :

Balanced	Energy	Eyes	Minerals	Muscles
Sick	Stored	Strong	Warm	Water

- (i) Carbohydrates give the body _____.
- (ii) Proteins help our _____ grow.
- (iii) Fats help the body to give _____ energy.
- (iv) Fats help to keep the body _____.
- (v) Vitamins and _____ help the body work properly.
- (vi) Vitamin A is good for our _____.
- (vii) Vitamin C protects us from getting _____ easily.
- (viii) Calcium makes our teeth and bones _____.
- (ix) The main component in our body is _____.
- (x) To have a _____ diet means to eat a variety of food and to eat in moderation.

2. Put each food in the correct nutrient group :


Bread, Butter, Meat, orange, spinach, oil, Milk, carrot, potato, Tomato

Carbohydrates	Proteins	Fats	Vitamins	Minerals

3. Look at the both pictures carefully and answer the given questions :





















Plant C:
Has water,
placed under the Sun



Plant D:
No water,
placed under the Sun

- (i) Which plant will grow well? _____.
- (ii) Plant _____ will grow well because it _____.
- (iii) What happen with the plant that has no water? _____.

Tick the correct safety sign

Rail Road	 <input type="checkbox"/>	 <input type="checkbox"/>	 <input type="checkbox"/>
No Horn	 <input type="checkbox"/>	 <input type="checkbox"/>	 <input type="checkbox"/>
Speed Limit 80	 <input type="checkbox"/>	 <input type="checkbox"/>	 <input type="checkbox"/>
No Overtaking	 <input type="checkbox"/>	 <input type="checkbox"/>	 <input type="checkbox"/>
No Parking	 <input type="checkbox"/>	 <input type="checkbox"/>	 <input type="checkbox"/>
Stop	 <input type="checkbox"/>	 <input type="checkbox"/>	 <input type="checkbox"/>

Brain Sharpening Question

Priya has low haemoglobin content in her blood. Which disease is she suffering from?
Write the cure of the disease.

Activity

Make your own water sprinkler.

Take a tin with a plastic lid. Make tiny holes on the bottom of the tin, like the holes of a water sprinkler. Make a hole in the lid also. Now, pour water into the tin and close it with the lid. You see water flowing out through the holes. Close the hole on the lid with your finger and press it hard. It stops the flow of water. Now, you can sprinkle water at your own wish. Can you guess why the water stops flowing when the hole on the lid is closed?

Social Science

Read and Learn Lessons 1, 2, 8, 15 and 18.

Project Work : Prepare a model to 'Save Earth' by taking the reference from the video by using craft material and your fantastic creativity.

Assignment

1. Fill in the blanks with the words given below :

(North Pole, map, wheel, Indian Airline, 1613, Plassey, olive, 195)

- (i) A _____ is a representation or a drawing of the earth's surface according to a scale.
- (ii) The pole at the top is called the _____.
- (iii) The _____ branches are the symbol of peace.
- (iv) There are about _____ countries in the world.
- (v) The first factory was setup at Surat in Gujarat in _____.
- (vi) The Battle of _____ took place in 1757.
- (vii) The government airline in India is called _____.
- (viii) The invention of _____ revolutionised transport.

2. Write 'True' or False :

- (i) The latitude of South Pole is 90°N.
- (ii) North is always at the top of a map.
- (iii) An expressway is the highway that has 8 lanes.
- (iv) The Indian cottage industry also became the victim of the British.
- (v) The second World War started in 1945.

3. Name the following :

- (i) The last Mughal Emperor _____.
- (ii) The revolt of 1857 began in _____.
- (iii) The first soldier who started the rebel in 1857.
- (iv) Air travel first started in _____, _____ and _____.
- (v) The vertical lines are called the _____.
- (vi) Certain basic rights should be given every person in the world _____.

4. Write the years in which the following events occurred.
- (i) World War-1 started in _____.
 - (ii) World War-II ended in _____.
 - (iii) United Nations was formed in _____.
 - (iv) Universal Declaration of Human Rights _____.
 - (v) The first successful aeroplane was built in _____.

5. Match the following :

Column-I

- (i) First Railway introduce in
- (ii) Rani Laxmi Bai
- (iii) The main goal of the UN
- (iv) Hiroshima and Nagasaki


Column-II

- (a) Jhansi
- (b) Peace
- (c) Japan
- (d) Britain

Computer

Read lesson 1 and 2 and Learn exercises :

Activity Work : Make a chart on 'Different Types of computer used in different generations with the help of given picture.



Drawing

- 1. Fill colour in book pages no. 15, 18 and 24.
- 2. Draw and colour 'Mango' and 'Scenery' in your drawing notebook.