

VAISH MODEL SR. SEC. SCHOOL, BHIWANI

Summer Vacation Home Assignment

Session : 2025-26

Class : IV

English

1. **Marigold** : Read unit 3 and 4 and learn Unit-3 (Full)
2. **English Grammar** : Revise lessons 3 to 6
Learn an application to your principal for two days' leave due to visit to the grandparents.
Learn three forms of verbs (10) from your notebook.
3. **Written Work** : Write 10 difficult words from each unit-3 and 4 and write 10 pages of good handwriting in fair notebook.
4. Describe any one object from the following topics :
Clock, Study table, Blackboard, School bag, Book
5. **Activity** : Make a chart on the topic of 'Noun and its Kinds' (Draw or paste pictures to make it attractive)

Home Assignment

Note : Do the following written work in your fair notebook.

1. Write 'True' or 'False' for the given sentences:

- (i) Nasruddin boasted about his skill in archery.
- (ii) Alice opened the door that was sixteen inches high.
- (iii) Nasruddin aimed at the right target first time.
- (iv) Alice followed the white rabbit.

2. Rearrange the following group of words to make meaningful sentences :

- (i) animal the called fox is a clever
- (ii) melts sun the snow the
- (iii) sitting dog at is the gate
- (iv) made I paper boats

3. Arrange these words in alphabetical order :

- (i) snow, jacket, jeans, hat
- (ii) pillow, sheet, water, nail
- (iii) cap, ball, zoo, rose
- (iv) basket, dustbin, clock, airplane.

4. Choose the correct word from the following table and write in appropriate heading?

Computer, herd, love, crowd, January, honesty, Ganga, bunch, beauty, building, bouquet, ocean, Taj Mahal, Childhood, India, city

Proper Noun	Common Noun	Abstract Noun	Collective Noun

Hindi

- हिंदी पाठ्य पुस्तक रिमिनिम : पाठ 1,2,3 व 5 पढ़िए व अभ्यास सहित याद कीजिए।
 - हिंदी आधुनिक व्याकरण : पाठ 1 व 2 पढ़िए तथा अभ्यास याद कीजिए।
 - लिखित कार्य : अनुच्छेद 'सच की पुकार' व फीस माफी के लिए प्रधानाचार्या जी को प्रार्थना-पत्र लिखिए व याद कीजिए।
- दस (10) पृष्ठ सुलेख व पाठ 3 व 5 में से (20) कठिन शब्द लिखिए।

हिंदी कार्यभार





1. रिक्त स्थानों की पूर्ति कीजिए।

- दोपहर के समय दिनेश घर में बैठा कोई पढ़ रहा था।
- कुछ देर गपशप करने के बाद नसीरुद्दीन ने कहा— चलो दोस्त में घूम आएं।
- संसार की पल-पल पर घटती-बढ़ती रहती है।
- कुछ बादल हाथी के जैसे उठाए लगते हैं।

2. निम्नलिखित प्रश्नों के उत्तर एक पद या वाक्यांश में लिखिए।

- विसर्ग का उच्चारण किस तरह होता है?
- किसी व्यंजन को स्वर के बिना लिखने पर उसके नीचे एक तिरछी रेखा (\) लगाई जाती है। इस तिरछी रेखा को क्या कहते हैं?
- नसीरुद्दीन कैसी अचकन निकालकर लाए?
- 'किरमिच की गेंद' नामक पाठ में क्या रियों के चारों ओर कौन-से वृक्ष लहरा रहे थे?


3. नीचे दिए गए चित्रों को देखकर उनकी भाषा के रूप लिखिए।



4. नीचे दिए गए प्रश्नों के उत्तर वर्ग पहली में से खोजिए व लिखिए।

अं	खी	व्या	क	र	ण	दा	दे
द	ग्रे	ची	गु	रो	मौ	ली	व
र	ली	जी	रो	म	खि	ख	ना
मा	भा	त्र	खी	ल	क	भा	ग
ला	षा	मु	मी	कु	भा	ही	री
ही	रु	मा	ना	नी	षा	चु	जा
गु	ड	ह	हु	लि	खि	ह	न

- भाषा के शुद्ध रूप का ज्ञान कौन कराता है?
- पंजाबी भाषा की लिपि कौन-सी है?
- बोलना और सुनना भाषा का कौन-सा रूप है?



(iv) अंतर्राष्ट्रीय भाषा कौन-सी है?

(v) हिन्दी भाषा की लिपि कौन-सी है?

नोट : हिन्दी का गृहकार्य अलग कॉपी में लिखिए।

प्रयोगात्मक कार्य : किन्हीं दस विलोम शब्दों (पृष्ठ संख्या 53 से) को मॉडल/चार्ट के द्वारा प्रदर्शित कीजिए।

Mathematics

Learn tables 2 to 20.

Math-Magic : Revise Ch.1 to 4.

Reasoning : Revise Ch.1 and 2.

Assignment

- We use different modes of transport for moving from one place to another. The most common mode of land transport are two-wheelers, cars, buses and trains. Three friends bought different modes of transport. The cost of each is as follows :
 - Priya's scooter = Rs. 52,609
 - Vikas's bike = Rs. 97,529
 - Preeti's car = Rs. 9,32,713Read the numbers and write their number names.
- 28,000 families visited Shimla during summers in a year and 37,500 families visited next year. In the third year only 19,250 families visited Shimla. Arrange these numbers in descending order.
- Use the given digits to build five-digit numbers based on the clues.
8, 5, 7, 0, 2
 - Smallest five-digit number _____.
 - Greatest five-digit number _____.
 - Smallest five-digit number with 5 at ones place _____.
 - Greatest five-digit number with 7 at tens place _____.
- Solve :
 - $32 \text{ km } 130 \text{ m} + 16 \text{ km } 180 \text{ m}$
 - $14 \text{ m } 25 \text{ cm} - 9 \text{ m } 85 \text{ cm}$
 - 4173×26
 - $4372 - 2148$
- Compare using $<$, $>$ or $=$
 - 200 more than 1800 400 more than 1600
 - $1929 - 0$ 1922
 - 500 less than 2000 500 more than 2000
 - $1200 + 200 + 100$ $2000 - 500 + 100$
- Find the difference between greatest 4-digit number and greatest 3-digit number.

7. In a 100 metre race for boys, Rahul is nearest the finishing line just 5 metres from it. Shivam is 10 m behind Rahul. Amit is 8m behind Shivam and Rohan is just 2m behind Amit.

- (i) How much distance does Rahul cover?
- (ii) Who is farthest from finishing line?
- (iii) Who is nearest to finishing line?
- (iv) How far is Amit from the finishing line?

8. 69 children of class IV are going to picnic in a park. They started at 9:00 am and takes half an hour to reach. They stay there 2 hours 15 minutes.

- (i) At what time they reach to park?
- (ii) If each bus carry 35 children, then how many buses are needed?
- (iii) If 3 children seated on a seat, then how many seats are needed for all?

9. Fill in the blanks :

- (i) 2 hours before 3:45 a.m. is _____.
- (ii) Half an hour after 4:20 p.m. is _____.
- (iii) There are _____ hours between 5 pm and 2 am.
- (iv) In 24-hour clock time, 11:15 p.m. is _____.
- (v) In 12-hour clock time, 0830 hours is _____.

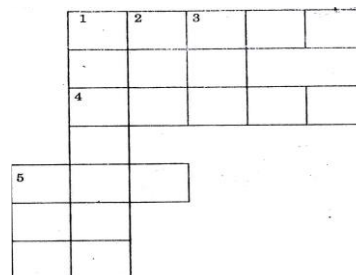
10. Solve the crossword using Roman numerals and the given clues.

Across : (→)

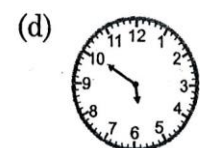
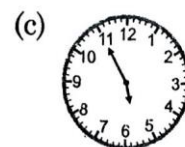
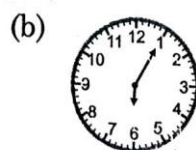
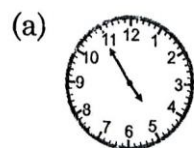
1. 36
2. 26
3. 16
4. 39
5. 12

Down : (↓)

1. 20
2. 19
3. 30
4. 18
5. 25



11. Tushar started his Power Point Presentation Project at 4:30 p.m. and completed it 1 hours 25 minutes later. Which of the following clock shows the time he finished his project?



12. Find the missing number :



- (a) 537
- (b) 547
- (c) 517
- (d) 527

13. How many meaningful words can be formed from the fourth, seventh, thirteenth and nineteenth letters of the given alphabet series.

PXAEMOTRZQCJFKBYDILSN

- (a) None
- (b) One
- (c) Two
- (d) More than two

14. A factory manufactures 375 mobiles everyday. How many mobiles does the factory manufacture in 3 weeks?

- (a) 8325 (b) 7875 (c) 8275


15. Find the value of P and Q respectively.

$$84956 - 43214 \rightarrow p + 32405 \rightarrow Q$$

Project Work :

Make a measurement project/model by making different measuring tools for different measuring units like length, weight, volume and time.

Example :



Science

- Read Lessons 1 to 4.
- Learn Que/Ans and exercise of Lessons-1 to 4.

‘Assignment’

1. Circle the odd one :

- | | | | |
|--------------|----------|-------------|---------|
| (i) Incisors | Canines | Tooth decay | Molars |
| (ii) Silk | Nylon | Wool | Cotton |
| (iii) Enamel | Tongue | Pulp | Dentine |
| (iv) Boiling | Pickling | Roasting | Drying |


2. Unscramble the letters and find the names of the names of the organs.

- (i) T S O A H M C _____
 (ii) B N A I R _____
 (iii) A H E T R _____
 (iv) T O M U H _____



3. Solve the crossword puzzle :

Across (→): 1. tearing teeth
 2. grinding teeth
 3. removes stuck food
 Down (↓): 4. sticky layer of germs
 5. cutting teeth



4. Milk Teeth vs. Permanent Teeth

Make a comparison table :

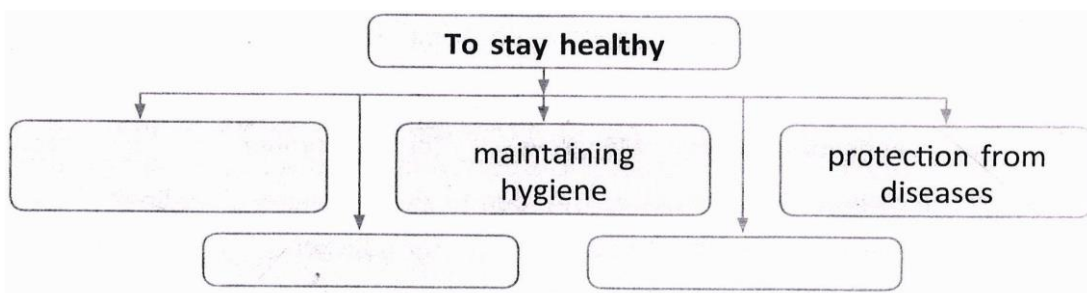
Feature	Milk Teeth	Permanent Teeth
Number		
When they appear		
Fall out or not?		

5. Find out the names of five healthy food items in the given grid. The names may read forward, backward and across.



D	N	E	Q	R	B	B	G
G	S	T	I	U	R	F	C
A	W	P	S	T	E	I	H
P	K	U	M	G	A	S	L
N	L	L	G	P	D	H	V
U	I	S	S	V	I	Y	T
Q	M	E	A	T	Z	P	J
R	A	S	L	V	U	Z	B

6. Complete the following chart :



7. Write five uses of plants.
8. Arrange the following in order of increasing space between their molecules.
 - (i) Milk, air, table _____
 - (ii) Smoke, paper, oil _____

Activity

It is said that 'HEALTH IS WEALTH'. To remain healthy, we must eat food containing all the nutrients i.e. carbohydrates, fats, proteins, vitamins, minerals, fibre and water in proper proportions that is a Balanced Diet. Note down what you ate for any five days during the vacation. Complete the following table (A4 Sheet) and check wheather your diet was a balanced diet. What food items you need to add or remove to make it a balanced diet.

Days	Food you ate			Nutrients it provided	Nutrients it Lacked	Food items to be added/removed to make it a Balanced Diet
	Breakfast	Lunch	Dinner			
Day 1						
Day 2						
Day 3						
Day 4						
Day 5						

Write a catchy slogan on the importance of Balanced diet on an A-4 size sheet.

Social Science

- Revise Lessons 1, 8 and 13.
- Learn exercise and question/answers of Lessons-2, 15 and 20.
- Read Lessons-3 and 9

Assignment

1. Give one word :

- (i) A row of mountains _____.
- (ii) Narrow path in the mountains _____.
- (iii) The dam built on river satluj _____.
- (iv) The action started by government to clean river Ganga _____.
- (v) A special tea of Kashmir _____
- (vi) The least populous state of India _____.
- (vii) The capital of Arunachal Pradesh _____.
- (viii) A hill station situated in the Northern part of West Bengal.
- (ix) Plain area in mountains _____.
- (x) The fastest means of transport. _____.
- (xi) The state known as fruit bowl of India. _____.
- (xii) Rivers of ice and snow _____.

2. Write the height of these peaks of Himalayas :

- (i) Mount Everest
- (ii) K2
- (iii) Kanchenjunga
- (iv) Makalu
- (v) Dhaulagiri

3. Define these terms :

- (i) Mountain Pass
- (ii) Glacier
- (iii) Kangri
- (iv) Terrace farming
- (v) Highway

4. Write True or False against these sentences.

- (i) Gangotri is the name of a river.
- (ii) The highest range of Himalayas is Himadri.
- (iii) Roads are made for trains.
- (iv) All modes of transports are use the same type of fuel.
- (v) Train is the fastest means of transport.
- (vi) Rickshaws are pulled by animals.
- (vii) Jammu and Kashmir lies in the Northern plains.
- (viii) Camels are used in mountains.
- (ix) Mount Everest is located in India.
- (x) Bullock-carts are used in villages.

Activity :

Design a mini travel brochure titled 'Trip to the Northern Mountains'. The brochure should included the following :

- (i) Hill stations (e.g. Shimla, Nainital, Almora, Srinagar, Pahalgam-any one)
 - (ii) Climate
 - (iii) Cuisines
 - (iv) Animals found there
 - (v) Tourist spots
 - (vi) Traditions
- Brochure should be pictorial and informative
 - Write your name, class and section at the back of the brochure.

G.K.

Learn Lessons – 6 to 12.

Activity Work : Make a Model of any musical instrument.

Home Assignment

Answer the following questions from the help box given below :

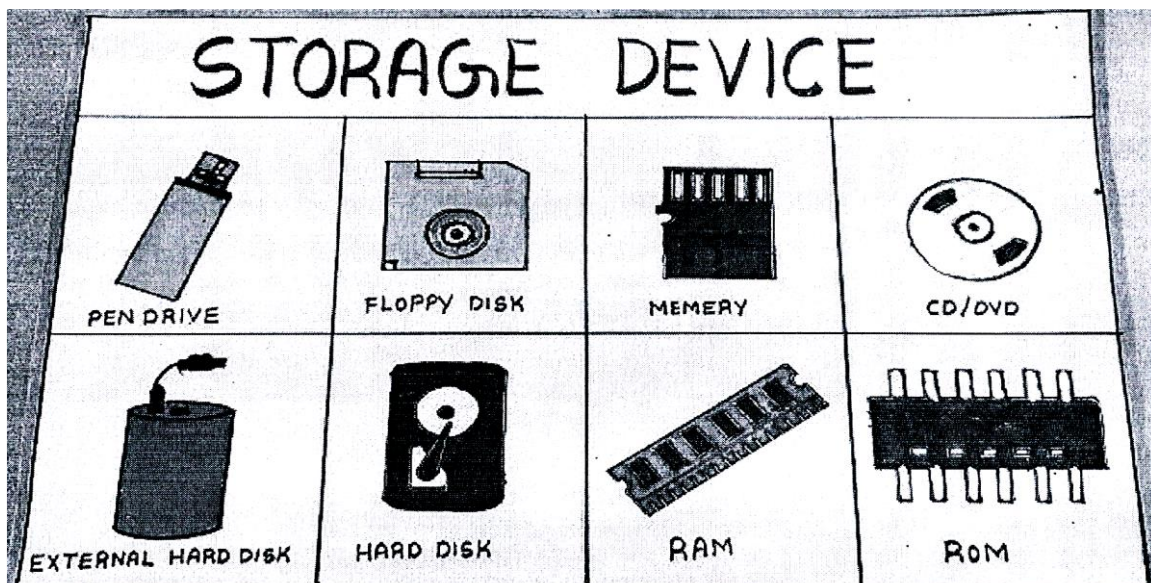
1. Who invented the telephone?
2. Which is the largest flower in the world?
3. Which bird can smell with its beak?
4. Who wrote 'Cinderella'?
5. Who is the current Prime Minister of India?
6. What is the other name of India?
7. Which woman took oath as the 15th President of India?
8. When did the terrorist attack in Pahalgam?
9. Who discovered television?
10. Which Indian city is the capital of two states?
11. Who is the current Chief Minister of Haryana?
12. Which is the largest Country (area) in the world?
13. Who is also known as 'Bapu'?

Help Box

Sh. Nayab Singh Saini, Rafflesia, Smt. Draupad; Murmu, Russia, Sh. Narender Modi, Alexander Graham Bell, Kiwi, Bharat, Charles Perrault, Chandigarh, 22 April 2025, John Logie Baird, Mahatma Gandhi

Computer

- Read lesson 1 & 2 and Learn their exercises :
- Do the creative corner of computer book page no. 12, 13, 22 and 23.
- Activity Work : Collect pictures of different types of storage devices and paste them on a chart with the help of given picture.



Drawing

1. Fill colour in book page no. 7, 9 and 10.
2. Draw and colour 'Parrot' and 'Tortoise' in your drawing notebook.