

VAISH MODEL SR. SEC. SCHOOL, BHIWANI

Summer Vacation Home Assignment

Session : 2025-26

Class : III

English

- English Textbook : Read lessons 1, 2 and 3. Learn their exercises with Que/Ans. Write and learn 10 difficult words from each lesson (1 to 3) other than written in your fair notebook.
- Grammar : Revise lessons from 1 to 5.

हिन्दी

- पाठ्य पुस्तक वीणा : पाठ-4 व 5 पढ़िए और उनका अभ्यास, प्रश्न/उत्तर सहित याद कीजिए।
- आधुनिक व्याकरण : पाठ-2 व 3 पढ़िए और उनका अभ्यास, प्रश्न/उत्तर सहित याद कीजिए।
- नोट : लिखित कार्य एक अलग कॉपी में लिखना है।

Mathematics

- Learn and write tables 2 to 20 in your fair notebook.
- Revise chapters 1 to 3.

Science

- Read lessons 1 to 4.
- Learn their exercise with Ques/Answers.

Social Science

- Read lessons 1, 2, 5 and 7 learn their exercise with Que/Ans.

G.K.

- Read and learn unit-1, 2.

Drawing

- Fill colour in book pg. no. – 8, 9 and 10.
- Draw and colour 'Bird' and 'Pattern Design'

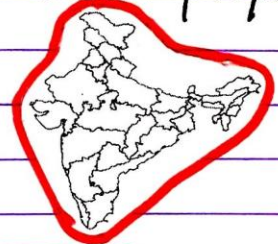


Home work for vacations


Subject - English

1. If you look keenly, the sentences given below may look odd! Can you arrange them properly?

(a) country my India is



b. father car washed the






c. Seema best friend my is



d. we play everyday garden in the



2. Look at these pictures: All these are nouns.



These are the pictures of persons, animals, places or things. Write their names in four columns.

Persons	Animals	Places	Things
1.	1.	1.	1.
2.	2.	2.	2.
3.	3.	3.	3.
4.			

3. Kamal and Radha are best friends. Observe their telephonic conversation and fill in the blanks with suitable pronouns.

Kamal : Hi Radha! How are _____?

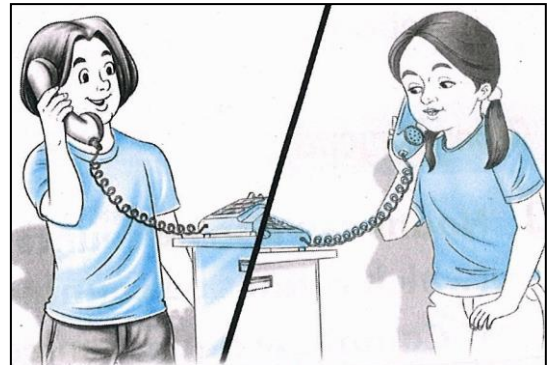
Radha : I am good. How are _____?

Kamal : Oh! _____ am very bored.
Lockdown has really made
_____ miss friends.
_____ is frustrating.

Radha : Yes! _____ too feel the same.
_____ dearly miss our class
teacher. _____ always made the
classes interesting.

Kamal : Agree! _____ hope, we get to go to school soon.

Radha : True. See _____ again. Bye! _____ take care.



4. Write the plural form of these singular nouns.

(i) tooth _____	(ii) witch _____
(iii) Wolf _____	(iv) mouse _____
(v) Goose _____	(vi) potato _____
(vii) Lady _____	(viii) Loaf _____


5. Fill in the crossword with appropriate collective nouns.

Across

1. A _____ of fish
2. A _____ of mountains
3. An _____ of stamps
4. A _____ of singers
5. A _____ of chairs

Down

1. A _____ of bees
6. A _____ of directors
7. A _____ of cards
8. A _____ of roses
9. A _____ of thieves



हिंदी कार्यभार

1. खाली स्थान भरिए :

- (i) अनुनासिक को भी कहते हैं।
- (ii) स्वर की कोई मात्रा नहीं होती।
- (iii) वर्णों के मेल से बनते हैं।
- (iv) अर्थ के आधार पर शब्द के भेद होते हैं।

2. सही विकल्प चुनकर उत्तर लिखिए।

- (i) विसर्ग कहते हैं –
(अ) अः को (ब) अं को (स) अँ को
- (ii) वर्ण के भेद होते हैं –
(अ) एक (ब) दो (स) तीन
- (iii) अं, अँ तथा अः को कहते हैं –
(अ) अनुस्वार (ब) अनुनासिक (स) अयोगवाह
- (iv) शब्दों के सार्थक समूह से क्या बनते हैं?
(अ) वाक्य (ब) शब्द (स) पद्य

3. (✓)/(×) का निशान लगाइए –

- (i) बया को महारानी कहकर पुकारा गया है। ☐
- (ii) चिड़िया दुकान से दाना लाती है। ☐
- (iii) सौरभ को आम बहुत अच्छे लगे। ☐
- (iv) पिताजी की बात सुनकर प्रिया उदास हो गई। ☐

4. निम्नलिखित वाक्य 'किसने' तथा 'किसको' कहे?

- | | किसने कहा? | किसको कहा? |
|---|------------|------------|
| (i) "यह आम का पौधा मैंने लगाया है।" | | |
| (ii) "छोटे से पौधे को बड़ा होने में समय लगेगा।" | | |
| (iii) "कोई बात नहीं, हम पौधे की देखभाल करेंगे।" | | |
| (iv) "क्या बात है? आज तुम दोनों बहुत प्रसन्न हो।" | | |

Maths Assignment

1. Given below is the height of the world's highest mountains. Write their heights in words and arrange them in ascending order.

Rank	Mountain	Approximate height (in metres)
1.	Everest	8,848
2.	K2	8,611
3.	Kanchenjunga	8,586
4.	Lhotse	8,516
5.	Makalu	8,481


In words :

- (i) _____

- (ii) _____
 (iii) _____
 (iv) _____
 (v) _____

Ascending order : _____, _____, _____, _____, _____

2. Form the Greatest and smallest Number :



	Digits	Greatest number	Smallest Number
(i)	8, 4, 7, 1	_____	_____
(ii)	3, 9, 0, 4	_____	_____

3. My number name has two words. The first word has 6 letters and second word has 4 letters. I am very near to 90. Who am I?



- (i) Who has a longer name? _____
 (ii) How many letters are there in shorter name? _____

5. Write the predecessor and successor of the given numbers :

	Predecessor	Numbers	Successor
(i)	_____	889	_____
(ii)	_____	119	_____

6. Write the place value and face value of underlined digits :

	Place Value	Face Value
(i) 1 <u>9</u> 39	_____	_____
(ii) 75 <u>2</u> 4	_____	_____

7. Complete the following :

- (i) Two bundles of 10 make _____.
 (ii) Five bundles of 10 make _____.
 (iii) Ten bundles of 10 make _____.

- (iv) Four bundles of 100 make _____.
- (v) One bundle of 100+2 bundles of 10+5 ones make _____.

8. Write 'Even' or 'Odd' for the following :

- (i) 270 - _____ (iii) 73 - _____
- (ii) 169 - _____ (iv) 387 - _____

9. Look at the picture carefully and write the names of 3-D shapes.

- (i) _____
- (ii) _____
- (iii) _____
- (iv) _____



10. Identify and write the shapes of the following objects :

1. _____
2. _____
3. _____
4. _____



Science 'Assignment'

1. Write the words given in the box in the correct column.

lamp phone orange juice saliva carbon dioxide air
milk apple oxygen rain leaf smoke



SOLIDS	LIQUIDS	GASES



2. Who am I? Answers are given in jumbled letters. Set them correct to get the answers.

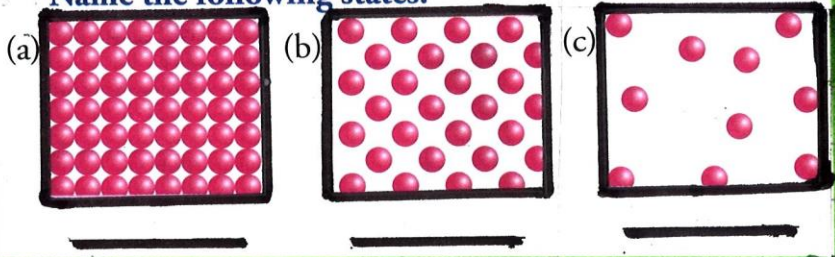
- | | | |
|---|-----------|-------|
| 1. I am a domestic animal and give you milk. | FFABLUO | _____ |
| 2. I don't have chewing teeth but I swallow food. | KESNA | _____ |
| 3. I carry load for you. | SEROH | _____ |
| 4. I am a plant eater. | EDER | _____ |
| 5. I have a straw to suck in liquid food. | LYFTTBEUR | _____ |

3. Circle the odd one out:-

- i. Lion Tiger Cow Leopard
- ii. Sugar Salt Chalk Water
- iii. Mosquito Butterfly Honeybee Parrot
- iv. Gravel Sand Colour Clay
- v. Petrol Oil Milk Cake



4. Name the following states.



5. Write 'True' or false for the following.

- (i) The colour of soil differs from place to place.
- (ii) It is safe to play in the kitchen.
- (iii) Water exists in all the three forms.
- (iv) Cow and goat are herbivores.
- (v) Touch electrical fitting with wet hands.

6. Match the following :

- | | |
|-------------------|-----------------------------|
| (i) Soil | (a) Omnivores |
| (ii) Dogs | (b) Sharp objects |
| (iii) Solids | (c) Makes the soil fertile |
| (iv) Humus | (d) Occupy a definite space |
| (v) Knife, blades | (e) Topmost layer of Earth |

7.

7 Colour Green 😊 if it is safe.
Colour red ☹ if it is unsafe

Swara is sharpening her pencil with a knife.

Ashok is pushing his sister into the pool.

Hana is sitting on the balcony railing of her house.

Mitali is waiting in line for her turn to drink water from the water cooler.



Richa loves eating fruit chaat from the street vendor.

Urvish is playing hide and seek in the playground with his friends.


Meer is asking his father to help him with his project which involves an experiment on condensation.

Social Science 'Assignment'

1. Identify the pictures and write the names of famous food items and their states:



Food item	State
_____	_____
_____	_____
_____	_____
_____	_____



2. Answer the following questions related to the calendar :

(i) Which month is shown on the calendar?

Ans. _____

(ii) How many days are there in this month?

Ans. _____

(iii) What is the date of second Monday?


Ans. _____

(iv) How many Sundays are there in this month?

Ans. _____

(v) Which month will come after this month?

Ans. _____



3. Fill in the blanks with the help of given words :

(expensive, separate, Potter, appliances)

(i) _____ makes the clay pots.

(ii) Multi-storeyed buildings are fitted with modern _____.

(iii) Each year has a _____ calendar.

(iv) Handmade things are very _____.

4. Answer the following

(i) Write the name of the Chief Minister of Haryana?

Ans. _____

(ii) Write the name of Governor of Haryana.

Ans. _____

(iii) Who is the Prime Minister of India?

Ans. _____

5. Identify the picture and answer the given questions :

(i) Who is the person?

Ans. _____

(ii) What is she famous for?

Ans. _____

(iii) What is the name of the organization that she started?

Ans. _____



G.K.

Home Assignment


1. Circle the odd one out :

- (i) Sheep Tiger Goat Cow
- (ii) Student Teacher Chef Doctor
- (iii) Food Fork Knife Spoon
- (iv) Sun Moon Train Star
- (v) Square Circle Triangle Rectangle

2. Choose the correct word from the brackets and write in the given space :

- (i) Bird : Fly : Fish : _____ (Swim, Walk)
- (ii) Clock : Time :: Thermometer : _____ (Distance, Temperature)
- (iii) Milk : Cow :: Egg : _____ (Lion, Hen)
- (iv) Feet : Walk :: Hands : _____ (Move, Hold)
- (v) Winter : Cold :: Summer : _____ (Hot, Rain)

3. Identify the signs and write their names.



4. Answer the following questions :

- (i) Which city is capital of Goa? _____
- (ii) Who invented the Telescope? _____
- (iii) Who was the first Indian woman speaker of Lok Sabha? _____
- (iv) Write the name of first President of Independent India? _____
- (v) Write the name of water body which has salty water? _____
- (vi) Who was first Indian woman to swim across seven seas? _____

Computer Assignment

- Read lesson 1 & 2 and Learn their exercises :
- Do the creative corner of computer book page no. 12 (part-A and B) and page no. 22 (part A).
- Match the following shortcut keys

Short-cut Keys in MS Paint.

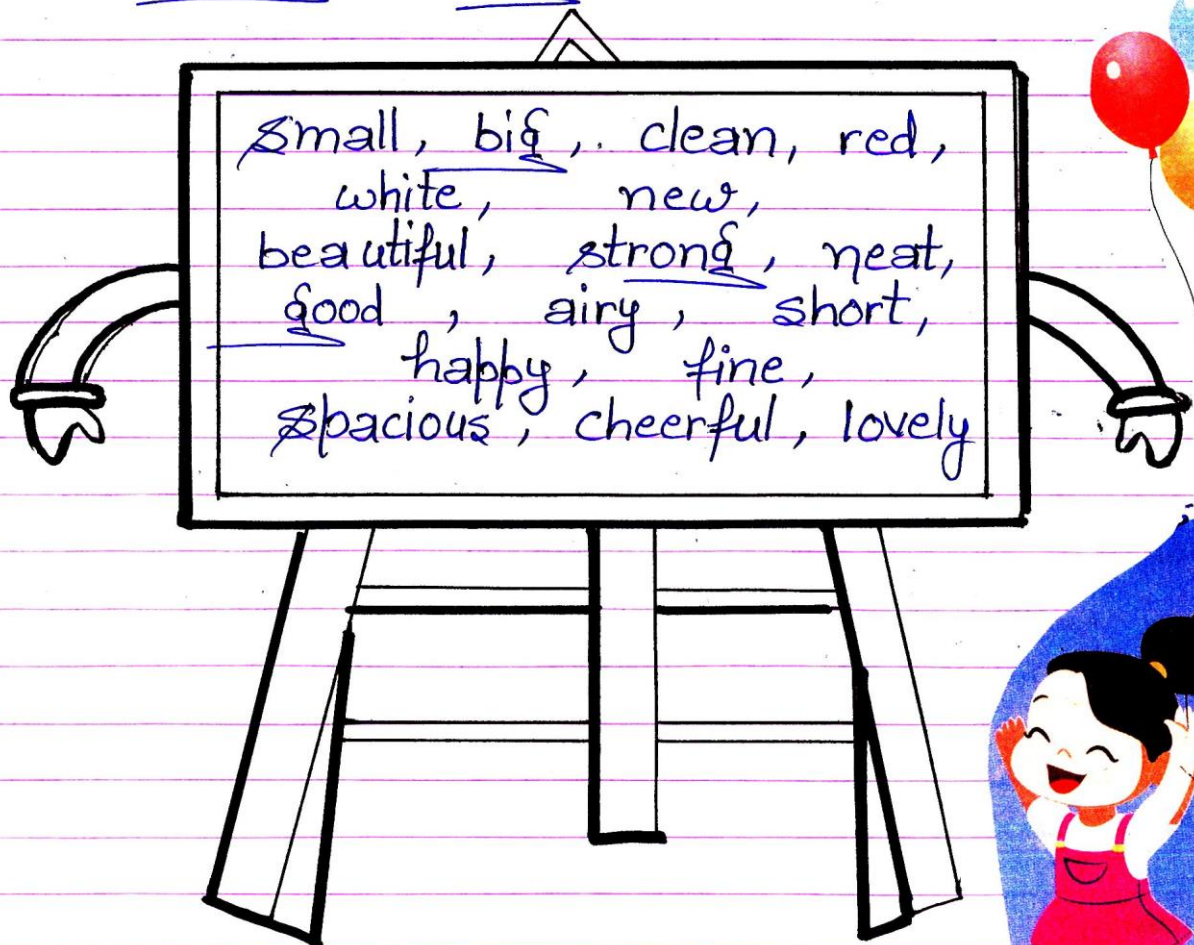
Copy	Ctrl + X
Paste	Ctrl + Y
Cut	Ctrl + Z
Undo	Ctrl + C
Redo	Ctrl + P
Save	Ctrl + V
Open	Ctrl + S
Print	Ctrl + O

Project Work



English:-

Draw a beautiful sketch of a house on a chart. Describe it in 10 lines using the describing words given below :-



Small, big, clean, red,
white, new,
beautiful, strong, neat,
good, airy, short,
happy, fine,
spacious, cheerful, lovely



Hindi :

A-4 शीट पर (1 से 10) तक की गिनती को हिन्दी शब्दों तथा अंकों में चित्रों के माध्यम से प्रदर्शित कीजिए :

उदाहरण :

गिनती	हिन्दी शब्द	हिन्दी अंक	चित्र
1	एक		☆

Mathematics :

Build a model of any object like Rocket, House or Snowman etc using different 3-D shapes.

Note : Students have to use thick coloured sheet or cardboard to cut the 3-D shapes

Science :

Draw outline of human body on A-3 sheet. Identify the given internal organs. Cut and paste them on their proper places and also write their names.

So. St.

Show 'yourself on the map' project by taking the reference from the video by using craft paper and your fantastic creativity.

G.K. :

Paste the pictures of any six folk dances on A-4 sheet and write the name of the state it is associated with.



