




# SUMMER HOLIDAYS HOMEWORK



CLASS: Third  
NAME: \_\_\_\_\_



# Homework

Note: Do all the written work in a separate notebook.

## English

Reader (Marigold): Read lessons of unit 1 & 2 and learn their exercise with Que/Ans.

Grammar: Revise lessons 1 to 5

Frame sentences using the following words:-

little, rat, school, grass, animal, big, clever

Write 10 difficult words (other than notebook) from each chapter of units 1 and 2

Write any 10 days News Headlines in good handwriting.

## हिंदी

पाठ्य पुस्तक रिमिडिम - पाठ-1, 2 और 3 पढ़िए व अभ्यास सहित याद कीजिए।

पाठ-3 (कविता) याद कीजिए।

व्याकरण - पाठ-1, 2 और 3 पढ़िए व अभ्यास सहित याद कीजिए।

अनुच्छेद - मेरा विद्यालय याद करके लिखिए।

सुलेख (10 पेज) लिखिए।

## Maths

Revise chapters 1, 2, 3 and 4.

Learn and write tables from 2 to 15

## Science

Read lessons 1 to 3 and learn their exercises with Que/Ans.

## So. St.

Read lessons 1, 2, 5 and 7 and learn their exercise with Que/Ans.

**G.K** Read and learn lessons 6 to 11.

**Drawing** Fill colour in book pages 3 to 10  
Draw and colour Flowers and Ice-cream  
in your drawing note-book.

**Computer** Read lessons 1 and 2 and learn exercise  
of Lesson-1



## Parents Corner

- Help your child to use 4 magical words PLEASE, SORRY, THANK YOU, EXCUSE ME as the part of basics of good manners.
- Encourage your child to listen.
- Gently care for animals. Encourage your child to be empathetic towards animals.
- "Healthy mind resides in a healthy body." so start your child day early and set his/her a routine even during vacations.

# English

Que 1. Sana is the opposite of her brother, Hansel. Describe her.



Hansel is a good boy. He is tall and fat. His nose is long. His hands are big. His eyes are happy. His smile is sweet. His dress is untidy. He is polite.

Sana is a \_\_\_\_\_ girl. She is \_\_\_\_\_ and \_\_\_\_\_. Her nose is \_\_\_\_\_. Her hands are \_\_\_\_\_. Her eyes are \_\_\_\_\_. Her smile is \_\_\_\_\_. Her dress is \_\_\_\_\_. She is \_\_\_\_\_.

Que 2. Rearrange the words to make meaningful sentences :-



1. clock a time tells us the



2. the cow milk us gives



3. joey my best friend is



4. the boy in the water swims

Que 3. Write the meanings of given words :-

Magic — \_\_\_\_\_

Proudly \_\_\_\_\_

Thrilled — \_\_\_\_\_

Instead \_\_\_\_\_

Que 4. Write the words in alphabetical order:—

1. car

train

bus

ship

2. red

yellow

green

black

3. lion

tiger

fox

wolf

4. crow

parrot

eagle

owl

Que 5. Complete the sentences with correct Wh- question :—

(i) \_\_\_\_\_ is your name?

(ii) \_\_\_\_\_ old are you?

(iii) \_\_\_\_\_ is your best friend?

(iv) \_\_\_\_\_ are you crying?

(v) \_\_\_\_\_ do you live? (vi) \_\_\_\_\_ do you wake up every day?

We can ask a question using the words— **Who, What, Where, When, Why and How.**



Que 6 Punctuate the given sentences :—


(i) that is dr. raj's clinic.

ii) neeti lives in tokyo.

iii) my birthday is in july.

iv) kolkata is in east india.

Nouns



Que 7. Write a general name of a person, a place, an animal and a thing in the bag :—

हिंदी

प्र०-1. नीचे दिए गए चित्रों के अनुसार भाषा के रूप लिखिए।



प्र०-2. निम्नलिखित मात्राओं के दो-दो शब्द बनाकर लिखिए।

० - फूल

f -

११ -

८ -

प्र०-3 उचित शब्दों की सहायता से रिक्त स्थान पूरे कीजिए।

[ मीठी, 22, मुँह, अ ]

- (क) जंगल के राजा के से ऐसी भाषा बोला नहीं देती।  
(ख) कोयल की बोली होती है।  
(ग) सभी व्यंजनों में स्वर लगा होता है।  
(घ) भारतीय संविधान द्वारा भाषाओं को मान्यता दी गई है।



# Maths

Q1. Arrange the following numbers in ascending and descending orders:



Ascending order:

---

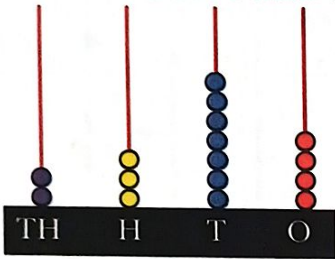
Descending order:

---

Q2. Read the abacus and write the number and number name.

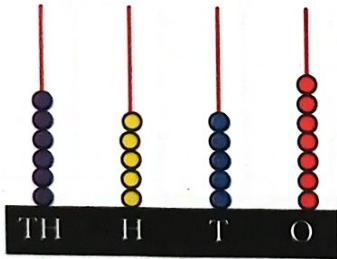


(a)


---

(b)


---



Q3. Fill in the blanks:


(a)  $6368 + 0 =$  \_\_\_\_\_

(b)  $4852 + 2735 =$  \_\_\_\_\_  $+ 4852$

(c)  $5154 -$  \_\_\_\_\_  $= 5153$

(d)  $730 - 200 =$  \_\_\_\_\_

(e) \_\_\_\_\_ is the greatest 3 digit number.





# Science

Q 4. Form the greatest and the smallest 4 digit numbers using the digits given below.

Digits	Greatest	Smallest
(a) 4, 6, 8, 2	_____	_____
(b) 1, 0, 3, 7	_____	_____



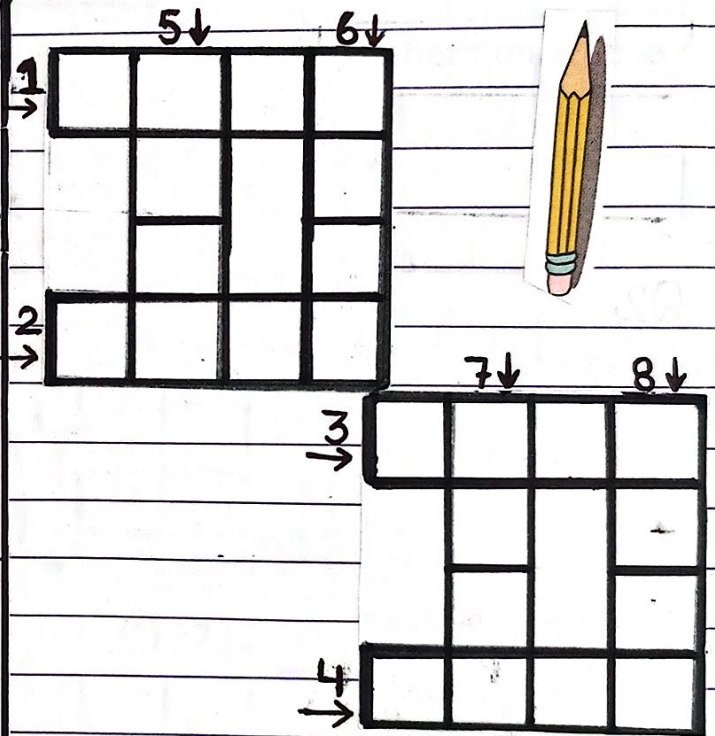
Q 5. Complete the crossword with answer.

→  
Across

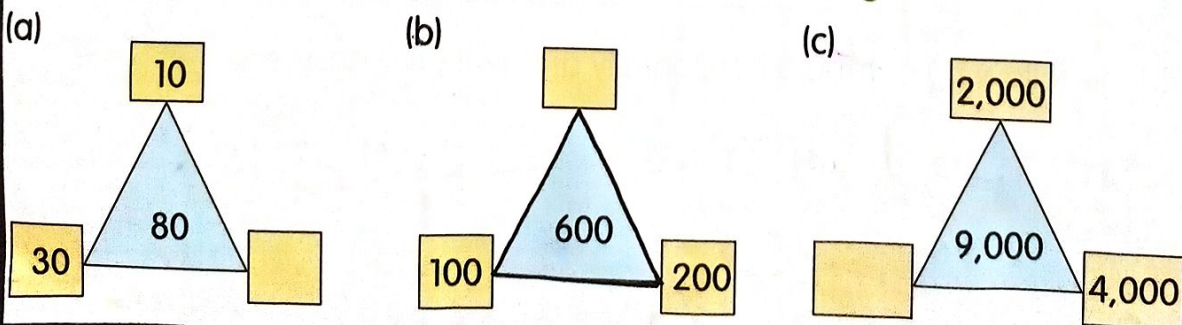
- (1) Two thousand two hundred thirty four
- (2) 9 thousands + 6 hundred + 8 tens + 9 ones
- (3) Write the greater number. (5306 or 5366)
- (4)  $8000 + 500 + 20 + 1$

Down ↓

- (5) Predecessor of 2097
- (6) Write the smaller number. (4876 or 4789)
- (7) 3 thousands + 9 hundreds + 5 ones
- (8) Successor of 6000



Q 6. The sum of the three numbers at the corners of a triangle is written inside the triangle. Fill in the blank box in each of the following—





Q7.

Read the number and answer.

(a) In 4573,

- (i) Which digit is in the hundreds place?
- (ii) What is the place value of the digit 3?
- (iii) What is the face value of the digit 5?

\_\_\_\_\_

\_\_\_\_\_

\_\_\_\_\_

(b) In 7109,

- (i) Which digit is in the tens place?
- (ii) What is the place value of the digit 7?
- (iii) What is the face value of the digit 1?


\_\_\_\_\_

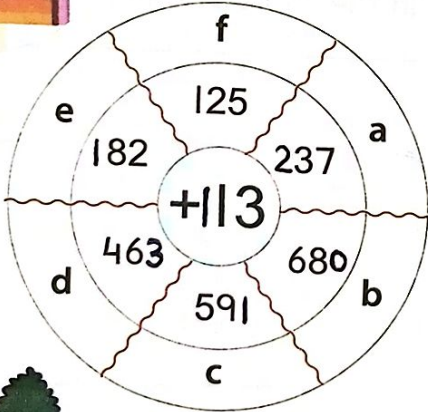
\_\_\_\_\_

\_\_\_\_\_



Q8. Add and find the answer to each letter in the circle:





a

=

b

=

c

=

d



=

e

=

f

=



# Science


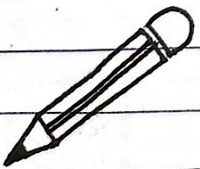


Que 1. Sort the given animals into herbivores, carnivores and omnivores.

Cat, Wolf, Elephant, Fox, Deer, Ostrich, Cow, Lion, Zebra  
Tiger, Goat, Monkey, Snake, Frog, Dog


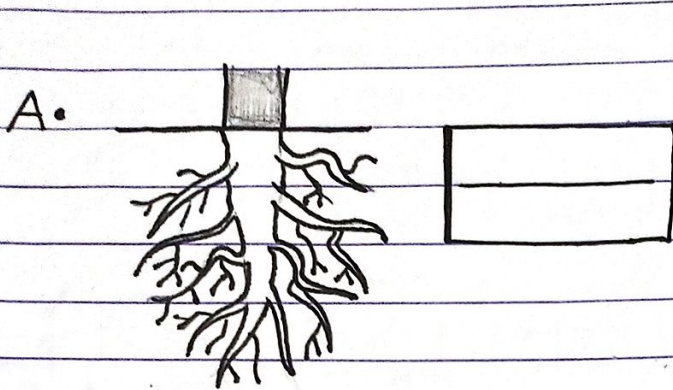
Herbivores	Carnivores	Omnivores



Que 2. Write Yes or No :-


	Does it breathe?	Does it move?	Does it need food?	Does it reproduce?	Is it a living thing?
					
					
					
					

Que Identify and write the name of the type of root.

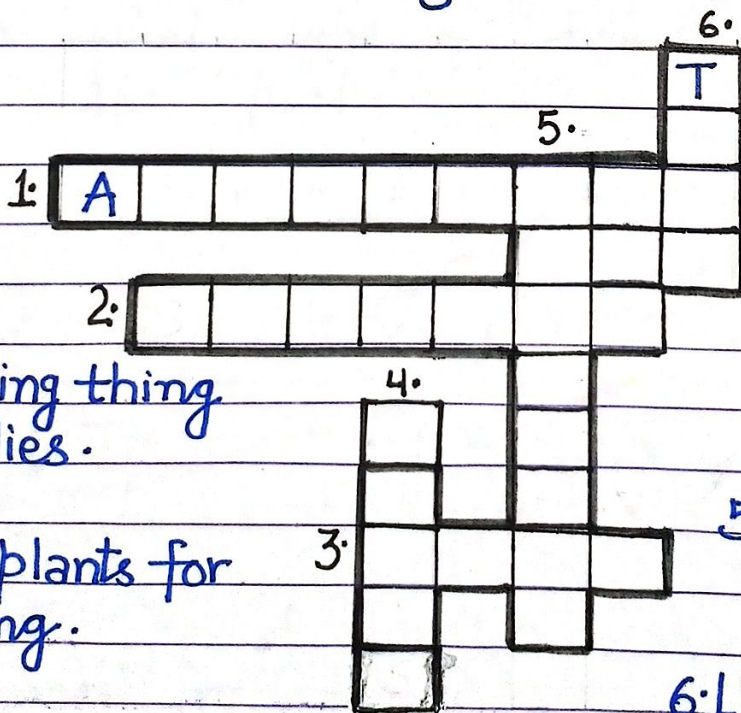


Que Tick  the plants with taproot and circle those with fibrous roots :-

- Rice       Radish  
 Carrot       Corn  
 Beetroot       Wheat       Grass



Que Solve the following crossword puzzle :-



• Across →

1. A non-living thing that flies.

2. Used by plants for breathing.

3. Food factory of the plant.

• Down ↓


4. Used by fish for breathing.

5. Used by insects to sense their surroundings.

6. Living thing that can't move from one place to another.

## So. st

- ★ Arrange the jumbled letters to make the names of festivals, but one common letter is missing. Try to find it.



The common letter is \_\_\_\_\_

The word on 1st petal \_\_\_\_\_

The word on 2nd petal \_\_\_\_\_

The word on 3rd petal \_\_\_\_\_

The word on 4th petal \_\_\_\_\_

The word on 5th petal \_\_\_\_\_

- ★ Answer the following questions:

Q1. In what type of houses people lived in the past?

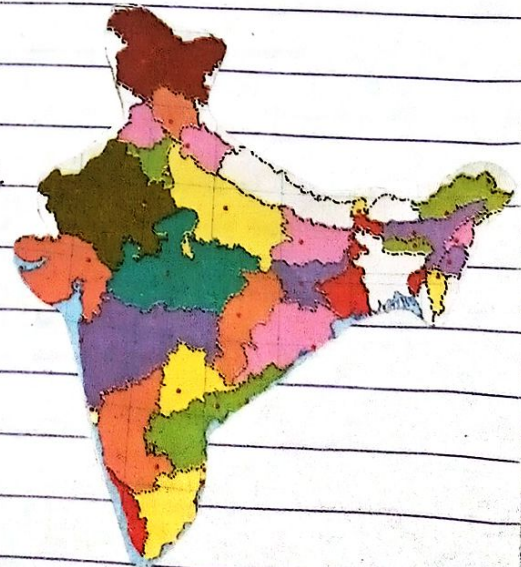
Ans \_\_\_\_\_

Q2. How many states are there in India?

Ans \_\_\_\_\_

Q3. What type of families are common nowadays?

Ans \_\_\_\_\_





# G.K. Assignment

1. Read the riddles in Column 'A' and match them with their answers in Column 'B':

## Column A

1. I have hands but, I cannot clap.

2. I am fluffy in the sky so high, when it rains, you will hear me cry.

3. I have many keys but cannot open a single lock.

4. I have a thousand needles, but I cannot sew.

5. Tap, tap, I come to life, with me you can talk, text or video chat.

6. I have been around for millions of years but not more than a month old.

## Column B



moon



clock



mobile phone



cloud



porcupine



piano

a

b

d

e

f

2. Write the names of the capitals of the given states.

i. Nagaland :-

ii. Goa :-

iii. Maharashtra :-

iv. Uttarakhand :-

v. Gujarat :-

vi. Jharkhand :-

vii. Haryana :-

viii. Bihar :-

3. Unscramble the letters to name the tourist spots.

i. AHDALK \_\_\_\_\_

ii. ADL AKEL \_\_\_\_\_

iii. CHMIARARN \_\_\_\_\_

iv. AAGHW OREBDR \_\_\_\_\_

v. VTHAIL PLEEMT \_\_\_\_\_




# Project Worksheet

**English:** Collect the pictures of the following things. Paste them on A4 sheet and also write at least three sentences about each.



- (i) My Favourite Dress
- (ii) My Favourite Food
- (iii) My Favourite cartoon
- (iv) My Favourite Game



## हिन्दी

आपको अपने परिवार का कौन सा सदस्य सबसे अधिक पसंद है? A4 शीट पर उनकी तस्वीर चिपकाकर उनके बारे में पाँच पंक्तियाँ लिखिए।

## Maths

Draw the calendar of August-2024 on A4 Sheet and answer the following questions-

AUGUST-2024						
S	M	T	W	T	F	S
				1	2	3
4	5	6	7	8	9	10
11	12	13	14	15	16	17
18	19	20	21	22	23	24
25	26	27	28	29	30	31



\* How many Sundays are there in this month?

\* What is the day on 15 August, 2024?

\* What is the date of fourth Friday?

\* How many days are there in this month?



## Science:

Prepare a chart of your 'Family Tree'. Paste pictures of all your family members. Mention their names, Date of birth and Date of marriage (if applicable).

So. St.



Find out about 7-8 famous useful inventions such as the telephone, radio, airplane, electric bulb etc. Create a timeline of the years in which they were invented in a proper chronological order on a A4 sheet.



G.K. Paste any six medicinal leaves on A4 sheet and write their names also.

## Some Every Day Tasks:

- Clean your room and keep it neat and tidy.
- Walk, jog, exercise and keep fit.
- Be creative do some drawing.
- Help your mother in the kitchen.

# Happy Holidays