



SUMMER HOLIDAYS HOMEWORK



CLASS: Fifth
NAME: _____



English

- **Marigold: - Read and learn the word-meanings, exercise and Ques./Ans. Of Unit 1 and 2.**
- **Grammar :- Learn lessons 4 , 5 and 6**
- **Written Work :- (in your fair notebook)**
 - (i) **Write five pages in good handwriting.**
 - (ii) **Find and write atleast 10 difficult words from Unit 1 and 2 each (other than notebook)**

Hindi

- **हिन्दी पाठ्य पुस्तक रिमझिम : पाठ-1 से 3 तक पढ़िए व अभ्यास सहित याद कीजिए।**
- **हिंदी व्याकरण : पाठ-1 व 2 पढ़िए व अभ्यास सहित याद कीजिए। 'वृक्ष हमारे मित्र' अनुच्छेद एवं 'छात्रवृत्ति प्राप्ति हेतु प्रधानाचार्या जी को प्रार्थना-पत्र' याद कीजिए।**
लिखित कार्य : हिंदी पाठ्यपुस्तक रिमझिम के (पाठ-1 से 3) में से 20 कठिन शब्द एवं 10 सुलेख एक अलग कॉपी में लिखिए।

संस्कृत

- **संकल्पम् प्रवेशिका : पाठ-1 से 3 पढ़िए व अभ्यास सहित याद कीजिए।**
- **व्याकरण : पशुओं, रंगों, फलों व एक से दस तक गिनती संस्कृत में याद कीजिए।**
- **बालक शब्दरूप व पठ् धातु (लट् लकार) याद कीजिए।**

Mathematics

- **Revise chapters 1,2 and 3**
- **Learn Table 2 to 20.**

Science

- **Read lessons 4 and 5.**
- **Learn Ques./Ans. and exercise of lessons 1 to 4.**

Social Studies

- **Read and Learn lessons 1, 2 and 9.**
- **Read Lessons – 3, 13 and 14.**

Computer

Read lesson 1 and 2.

Learn exercise of lesson -1

Drawing

- **Fill colour in Art-1 to 8 in your drawing book.**
- **Draw and colour the following articles in your drawing notebook:-**
- **(i) Butterfly (ii) Flower Pot**

ASSIGNMENTS

English

1. Write 'True' or 'False' for the following sentences :

- (i) The Ice-cream cart goes trundling down the street.
- (ii) The old wise bird did not want the creeper to be destroyed.
- (iii) Your shadow is the tallest at the noon time.
- (iv) Avail is the traditional dish of kerala.

2. Rearrange the following :-

- (i) Was island the inhabited.
- (ii) and plays she hockey football.
- (iii) Monument is a Red fort.

3. Fill in the blanks with correct homophones.

- (i) We are going to Shimla this _____ (week/weak)
- (ii) The _____ of the plant should be watered. (root/route)
- (iii) You can get milk by the nearby _____ (diary/dairy)

4. Underline the adverbs in the following :-

- (i) The body cried bitterly.
- (ii) They will reach Delhi tomorrow.
- (iii) I go to yoga class daily.

5. Write synonyms for the following words :-

- (i) Allow
- (ii) Rich
- (iii) begin

6. Write antonyms for the following words.

- (i) Empty
- (ii) Kind
- (iii) Peace

हिन्दी

1. निम्नलिखित कथनों के सामने सही (√) या गलत का (X) का निशान लगाइए :-

- (i) तिब्बत के बत्तीसवें राजा का नाम अकबर था।
- (ii) लड़की ने शर्त रखी कि राख की रस्सी मंत्री को गले में पहननी होगी।
- (iii) सरहुल के दिन साल के पेड़ की पूजा की जाती है।
- (iv) गेंद का मूल्य पाँच पैसे था।
- (v) व्याकरण के तीन अंग होते हैं।

2- नीचे दिए गए प्रश्नों के उत्तर एक शब्द या वाक्यांश में लिखिए:-

- (i) बालक तलवार व तीरकमान क्यों खरीदना चाहता था?
- (ii) झारखंड में कौन-सा पतंग का पर्व मनाया जाता है?
- (iii) लड़के को शहर जौ के सौ बोरे लाने के लिए किसने भेजा?
- (iv) 'राख की रस्सी' नामक पाठ में एक लड़की किससे जीत गई?
- (v) स्वर के कितने भेद होते हैं?

3- निम्नलिखित लोगों से आप कौन-सी चीज़ खरीदेंगे?

- (i) कुँजड़िन
- (ii) मनिहारिन
- (iii) पनवाड़ी
- (iv) ग्वालिन
- (v) हलवाई

4- कोष्ठक में से उचित शब्द छँटकर रिक्त स्थानों की पूर्ति कीजिए :-

(व्याकरण, अतिरिक्त, हिन्दी दिवस, नक्काशी)

- (i) ड़ तथा ढ़ को व्यंजन माना गया है।
- (ii) प्रतिवर्ष 14 सितंबर को के रूप में मनाया जाता है।
- (iii) प्रत्येक भाषा के लिए का ज्ञान होना अत्यंत आवश्यक है।
- (iv) केशव का काम करता था।

5- निर्देशानुसार लिखिए -

- (i) शब्दों को शुद्ध करके लिखिए :- तीथी, स्वस्थ्य, परिशरम
- (ii) अनेक शब्दों के लिए एक शब्द लिखिए :-
सच बोलने वाला
प्रशंसा करने योग्य
- (iii) पर्यायवाची शब्द लिखिए :-
बेटी, राजा, पानी (केवल दो-दो लिखिए)

संस्कृत

1. निम्नलिखित शब्दों के अर्थ लिखिए :-

इक्षुः, कच्छपः, परशुः, लकुटः, तडागः, मूषकौ, वानरः, गजाः, मेघौ, कपोताः

2. निम्नलिखित शब्दों का वर्ण-विच्छेद कीजिए :-

(i) बालकौ -

(ii) शिक्षकः-

(iii) छुरिका-

(iv) नौका-

(v) पेटिके-

3. वर्णों को मिलाकर पद बनाइए :

(i) घ् + अ + ट् + इ + क् + आ =

(ii) ब् + आ + ल् + अ + क् + आः =

(iii) म् + ऊ + ष् + अ + क् + अः =

(iv) स् + अं + स् + आ + र् + अः =

(v) व् + इ + ह् + आ + र् + अः =

4. शुद्ध संस्कृत पर्याय पर सही (✓) का चिह्न लगाइए :

(i)	दो घड़े -	घटः	<input type="checkbox"/>	घटौ	<input type="checkbox"/>	घटाः	<input type="checkbox"/>
(ii)	अनेक शिक्षक -	शिक्षकः	<input type="checkbox"/>	शिक्षकौ	<input type="checkbox"/>	शिक्षकाः	<input type="checkbox"/>
(iii)	मुर्गा -	कुक्कुटः	<input type="checkbox"/>	कुक्कुटौ	<input type="checkbox"/>	कुक्कुटाः	<input type="checkbox"/>
(iv)	अनेक कबूतर -	कपोतः	<input type="checkbox"/>	कपोतौ	<input type="checkbox"/>	कपोताः	<input type="checkbox"/>
(v)	दो तोते -	शुकः	<input type="checkbox"/>	शुकौ	<input type="checkbox"/>	शुकाः	<input type="checkbox"/>

Mathematics

1. Put commas according to Indian system and write in words : 715008769

2. Round off 985 to nearest 100.

3. Round off 764 to nearest 10.

4. Find the place value of 8 in 78705.

5. Find the sum of place value of 3 in 38323. _____.

6. An angle is called _____ angle if its angle measure is 180o .

7. What kind of angle is  _____.

8. Right angle = _____ degree.

9. $75 \times 2000 =$ _____

10. How many straight angles are there in alphabet A.

11. Which alphabetic letter look like a right angle?

12. $XCIV + LXX =$ _____

13. $D - CCC =$ _____

14. _____ + 7862 = 9805

15. How many letters are used in Roman numerals? _____.

16. How many zeros are there in ten lakh? _____

17. The number after 325999 is _____.

18. The digit 9 in the numeral 9235625 is in _____ period.

19. The fractions having the same denominator are called _____ fractions.

20. The reciprocal of $\frac{23}{38}$ is _____.

21. Reduce $\frac{15}{75}$ in the lowest term.

22. $\frac{27}{32} - \frac{13}{32}$

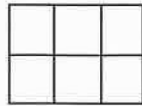
23. Which number is reciprocal of itself?

24. I am a 4-digit number. All my digits are the same. The sum of all four digits is 28. Find me. _____

25. Find the length, breadth, area and perimeter of given figure made of square (each square is 1 cm long).

i. Length = _____

ii. Breadth = _____




iii. Area = _____

iv. Perimeter = _____

26. There are 4 crates. Each crate has 21 bottles in it. How many bottles are there in all?

27. $3H+2T+5O = 5 \times$ _____

28. The distance around a closed figure is called its _____.

29. What kind of $\angle A$ and $\angle B$ 

30. The space covered by any shape is called _____.

31. $375+280$ 32×18 (use $>$, $<$ or $=$)

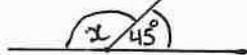
32. By how much 78425 is less than 873214 ?

33. 17 thousand more than 28 thousand = _____.

34. Shade $\frac{3}{4}$ part of given figure



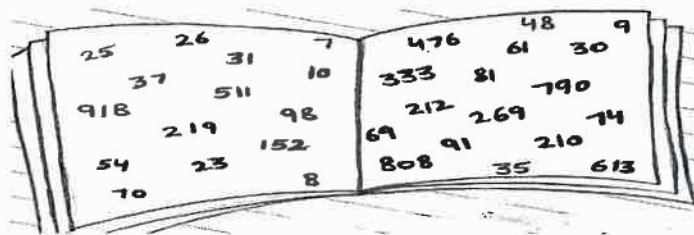
35. What is the value of x in



36. Check if they are equivalent $\frac{21}{59}$, $\frac{3}{7}$

37. $800000+6000+70+8 =$ _____

38. Look at the given picture and answer the following questions.



a. Choose all the even numbers.

- b. Choose all the odd numbers.
- c. Write all the prime numbers.
- d. Form the greatest 5-digit number taken out digits from these numbers.
- e. Form the smallest 5-digit number taken out digits from these numbers.
- f. Find two numbers whose sum is 488.
- g. Find the number if we interchange the ones digit by hundred digit the answer becomes 251.
- h. Write the greatest even number.
- i. Write the smallest odd number.
- j. Find the product of smallest and greatest odd numbers.

Science

1. Strike out the wrong word :-

- (i) Amoeba breathes through body surface /gills.
- (ii) Turtles swim with the help of flippers/paddles.
- (iii) Insects breathe through lungs/spiracles
- (iv) An emu is a flightless/flying bird.
- (v) A paramecium moves with the help of cilia/legs.

2. Tick the correct option :-

- (i) Read the information about an animal 'X' in the box given below :-

Animal X eats plant parts. It gives birth to young ones and feeds them with milk.

Identify the animal 'X'

- a. Fox b. Goat c. Tiger d. Lion
- (ii) I am a plant with thick leaves, green in colour. I need moisture to grow, I am found on hill station. Who am I?
a. Tea b. Banana c. Cactus d. Rose

(iii) Birds can fly due to light body weight. This is due to.

- (a) Hard bones
- (b) Soft bones
- (c) Cylindrical bones
- (d) Hollow bones

(iv) Rahul and Vijay went to a park to play. There were many plants in the park. Some plants were small and some big. Suddenly while playing Vijay tried to uproot a plant. Rahul stopped him from doing so. What according to you is the correct reason behind this?

- (a) Plants are very beautiful.
- (b) Some plants such as money plant provide us money.
- (c) Plants provide us fresh air, many fruits and vegetables which we use to eat.
- (d) All of these.

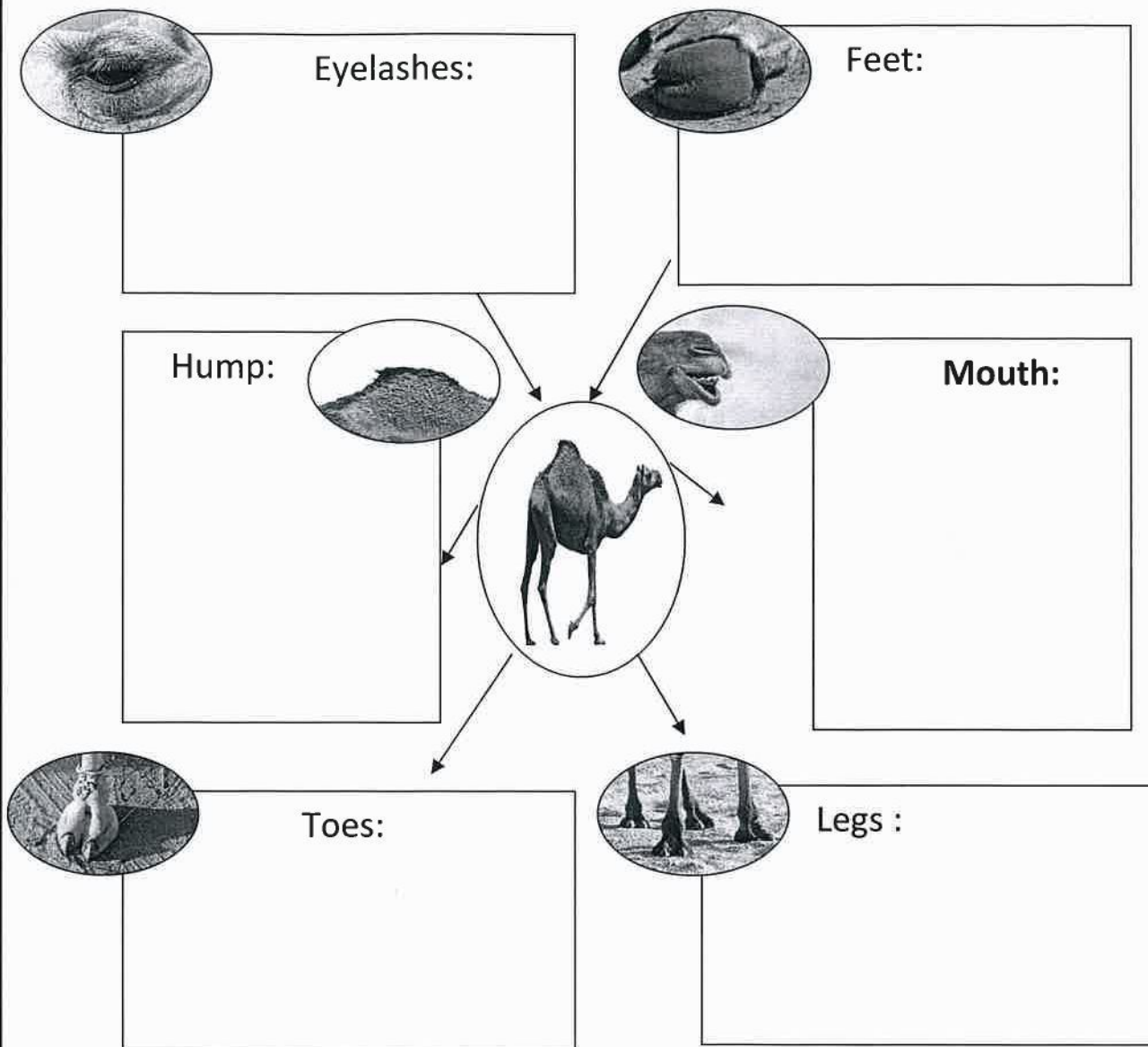
3. Circle the odd one out :-

- | | | | | |
|-------|--------|-------|--------|----------|
| (i) | Carrot | Rose | Radish | Turnip |
| (ii) | Potato | Fern | Ginger | Onion |
| (iii) | Monkey | Frog | Sloth | Squirrel |
| (iv) | Lion | Eagle | Wolf | Louse |

4. Add more to each set with the help of clues in brackets.

- (i) Seedcoat, _____, _____ (Parts of a seed)
- (ii) Wind, _____, _____, _____ (Agents of dispersal)
- (iii) Lungs, _____, _____, _____ (Breathing organs)
- (iv) Limbs, _____, _____, _____, (Help in movement)

5. How is a camel adapted to living in a desert? Complete the boxes.



So. St.

1. Fill in the blanks with the words given below :-

(Australia, opposite, longitude, different, water, Noise, urban, 54, The Hague, five)

- (i) The Security Council has _____ permanent members.
- (ii) The Economic and Social Council has _____ members.
- (iii) The headquarters of the International court of Justice is in _____.
- (iv) _____ is the smallest continent.
- (v) Vertical lines are lines of _____.
- (vi) The Prime Meridian and the International Date Line are _____ to each other.
- (vii) Physical maps use _____ colours.
- (viii) Oasis are source of _____.

(ix) Light pollution occurs in _____ areas.

(x) _____ is regarded as an unwanted sound.

2. Write 'True' or 'False' against these.

(i) Overuse of pesticides causes land pollution.

(ii) Polluted water may cause malaria.

(iii) The main aim of the UN is to maintain international peace and security.

(iv) All the 15 members of the Security Council have the veto power.

(v) The International Court of Justice has 15 judges.

(vi) The Supreme Court of India is the highest Court in India.

(vii) The Equator divides the Earth into north and South hemispheres.

(viii) Longitude measures distance from the prime meridian.

(ix) Deforestation is a cause of drought.

(x) We should not burn dry leaves to prevent air pollution.

3. Match the following :

(i) British royal observatory

a. $66\frac{1}{2}^{\circ}N$

(ii) Smallest Continent

b. 0°

(iii) Equator

C. Australia

(iv) A book of maps

d. Prime Meridian

(v) Arctic Circle

e. Atlas

b. Match the following:-

i. Tropic of cancer

(a) Pacific Ocean

ii. North Pole

(b) $23\frac{1}{2}^{\circ}N$

iii. Largest Ocean

(c) 90°

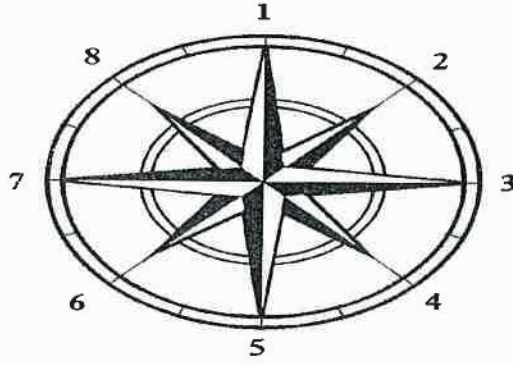
iv. Marine dumping

(d) 1939-1945

v. World war II

(e) Water Pollution

Know the Directions



In the above given figure of a compass rose, number 1 stands for North and number 3 for East. Write the cardinal directions and intermediate directions shown by other numbers.

2. _____ 4. _____ 5. _____

6. _____ 7. _____ 8. _____

Project Work

English : Prepare a project file based on the topic of Noun and its kinds. Paste or draw pictures to make it more attractive.

Hindi : ग्रीष्मकालीन अवकाश में आपने क्या-क्या सीखा या कहाँ-कहाँ घूमने गए? अपना अनुभव संक्षेप में लिखिए।

संस्कृत : पाँच पशुओं व पाँच फलों के नाम (संस्कृत में) चित्रों के माध्यम से दर्शाते हुए A-4 sheet पर लिखिए।

Maths : Make any four 3D shapes given below

Cube, Cuboid, Cylinder, Cone, Prism, Pyramid etc.

Science : Collect different kinds of seeds (atleast ten) paste them in scrapbook and write their methods of dispersal against them.

So. St. : Draw at least 10 symbols which are commonly used for state boundaries, metalled roads, places of worship, capital town of a country, broad gauge and narrow gauge railway line on A-4 sheet.

Computer : Collect some pictures of the different types of computers and paste them in your scrapbook and write their description also.

Special Tasks

- To know the names of the appliances used in the house.
- To learn to save water.
- Always switch off the electrical appliances while leave the room.
- To avoid T.V or mobile for one day in a week.
- To note down the number of household vehicles how much it drives daily etc.
- Take two books from the library and will also review them in 100 words.
- Write the names of Lok Sabha candidates. To identify the election symbols.